



Name _____ Date _____

Daily Schedule

In the Daily Schedule chart below, record six of your daily class activities. Then calculate the elapsed time, or duration, of each activity and record it on the chart.

Daily Schedule			
Event	Start Time	Stop Time	Duration of Event

Choose three events. List the event and record the start time and end time for each event on the clock faces below.

1. Event: _____

Start Time

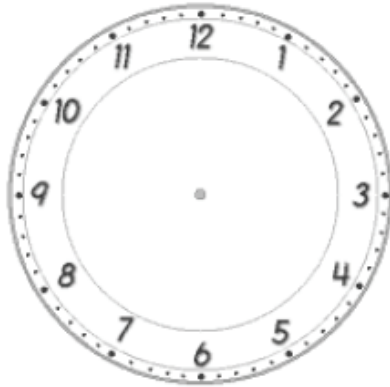


End Time

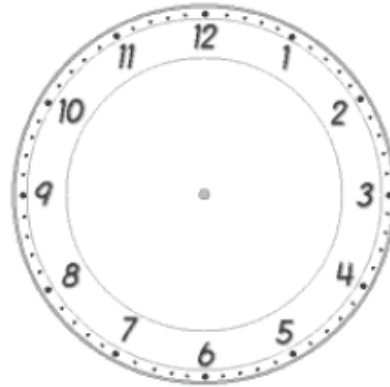


2. Event: _____

Start Time

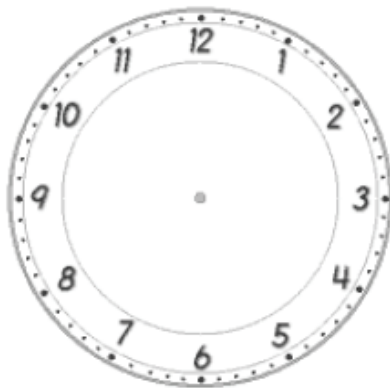


End Time

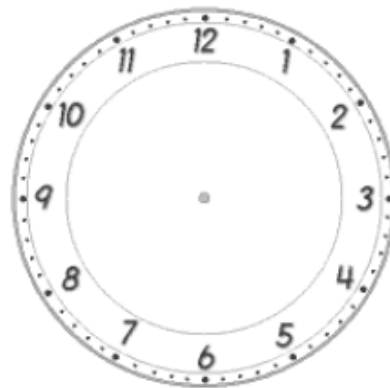


3. Event: _____

Start Time



End Time



4. Choose one of the events above and explain how you found the elapsed time.