

Name _____



Date _____
(Answer ID # 0921903)

Mixed Review

Complete.

1.

Favorite Subject

Subject	Number
Science	5
Music	11
Writing	8
Art	2
History	7
Mathematics	4

a. If 5 more people chose mathematics how many total people would have chosen mathematics?

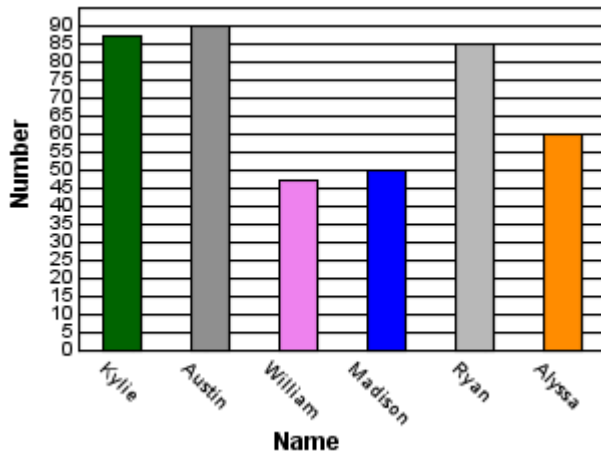
b. How many people chose either writing or music?

c. List the subjects in order from the subject with the most votes to the subject with the fewest votes.

Complete.

2.

Number of Books Owned



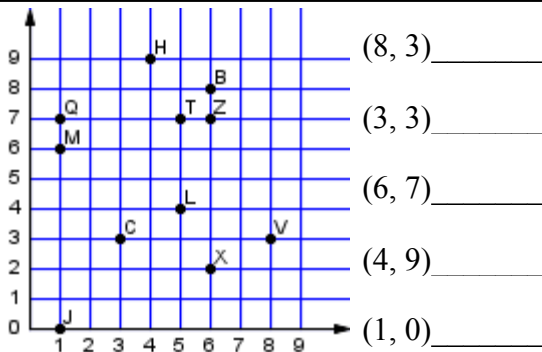
a. Austin received three books on his birthday. On the same day, Austin gave Kylie eight books. How many books does Austin have?

b. If William gave nine books to Kylie, how many books would Kylie have?

c. Which of the children own at least 60 books?

Find each ordered pair. Write the letter for the point named by the ordered pair.

3.



(8, 3) _____

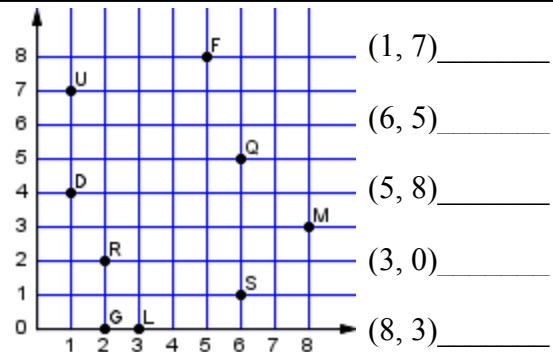
(3, 3) _____

(6, 7) _____

(4, 9) _____

(1, 0) _____

4.



(1, 7) _____

(6, 5) _____

(5, 8) _____

(3, 0) _____

(8, 3) _____

Write the ordered pair for each point.

<p>5.</p>	<p>E _____</p> <p>S _____</p> <p>A _____</p> <p>F _____</p> <p>C _____</p>
<p>6.</p>	<p>U _____</p> <p>N _____</p> <p>G _____</p> <p>X _____</p> <p>Z _____</p>

Complete.

<p>7.</p> <p style="text-align: center;">Age of Family Members</p>	<p>a. How much younger is the mother than the grandfather?</p> <p>_____</p> <p>b. List the members of the family in order by age from oldest to youngest.</p> <p>_____</p> <p>c. How much older is the grandfather than the youngest family member?</p> <p>_____</p>
---------------------------------------------------------------------------	----------------------------------------------------------------------------------------------------------------------------------------------------------------------------------------------------------------------------------------------------------------------

Complete.

<p>8.</p> <p style="text-align: center;">School Play Attendance</p>	<p>a. What is the difference, in people, between the day with the greatest attendance and the day with the smallest attendance?</p> <p>_____</p> <p>b. How many more people attended the performance on Thursday than the attendance on Tuesday?</p> <p>_____</p> <p>c. What was the total attendance for all of the play performances?</p> <p>_____</p>
----------------------------------------------------------------------------	----------------------------------------------------------------------------------------------------------------------------------------------------------------------------------------------------------------------------------------------------------------------------------------------------------------------------------------------------------

Answer Key 0921903

Complete.

1.

Favorite Subject	
Subject	Number
Science	5
Music	11
Writing	8
Art	2
History	7
Mathematics	4

a. If 5 more people chose mathematics how many total people would have chosen mathematics?
9

b. How many people chose either writing or music?
19

c. List the subjects in order from the subject with the most votes to the subject with the fewest votes.
Music, Writing, History, Science, Mathematics, Art

Complete.

2.

Number of Books Owned

a. Austin received three books on his birthday. On the same day, Austin gave Kylie eight books. How many books does Austin have?
85 books

b. If William gave nine books to Kylie, how many books would Kylie have?
96 books

c. Which of the children own at least 60 books?
Kylie, Austin, Ryan, and Alyssa

Find each ordered pair. Write the letter for the point named by the ordered pair.

3.

(8, 3)**V**

(3, 3)**C**

(6, 7)**Z**

(4, 9)**H**

(1, 0)**J**

4.

(1, 7)**U**

(6, 5)**Q**

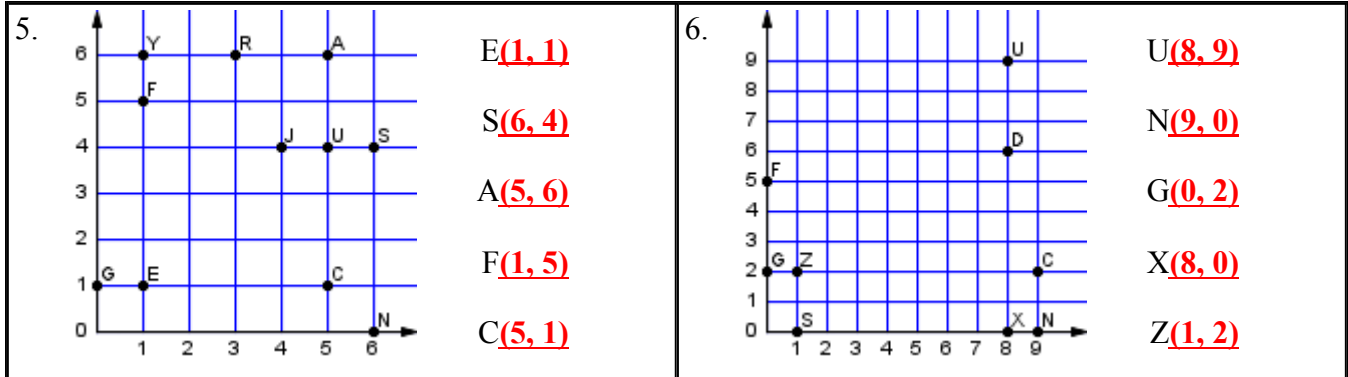
(5, 8)**F**

(3, 0)**L**

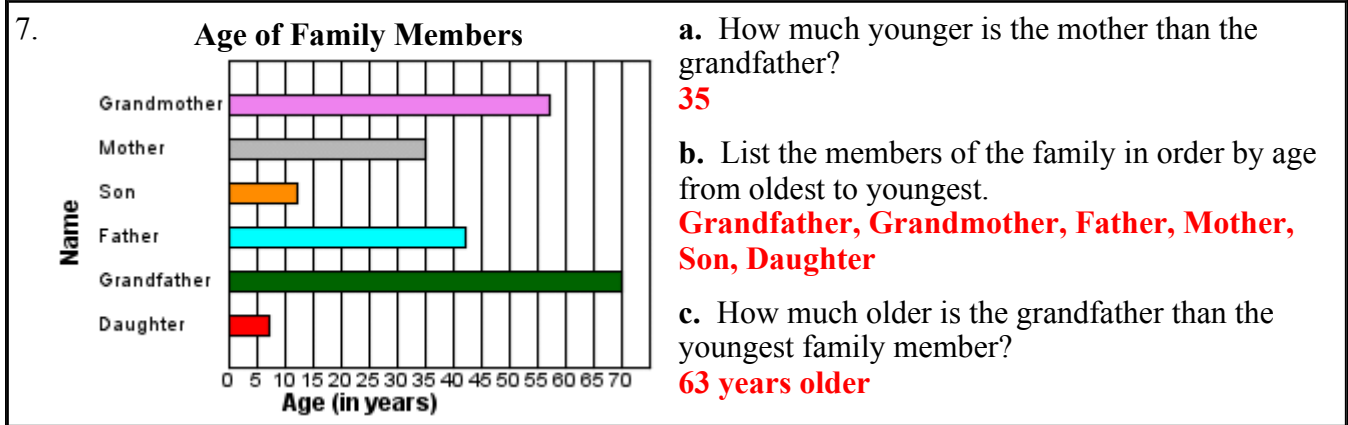
(8, 3)**M**

Answer Key 0921903

Write the ordered pair for each point.



Complete.



Complete.

